

☞ Homework 11 ☞

Due Tuesday, November 30, 2021 at 8pm

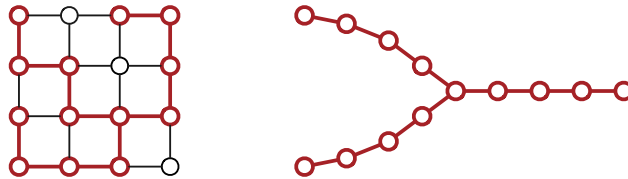
1. (a) A **quasi-satisfying assignment** for a 3CNF boolean formula Φ is an assignment of truth values to the variables such that at most one clause in Φ does not contain a true literal.

Prove that it is NP-hard to determine whether a given 3CNF boolean formula has a quasi-satisfying assignment.

- (b) A **near-clique** in a graph $G = (V, E)$ is a subset of vertices $S \subseteq V$ where adding a single edge between two vertices in S results in the set S becoming a clique.

Prove that it is NP-hard to find the size of the largest near-clique in a graph $G = (V, E)$.

2. A **wye** is an undirected graph that looks like the capital letter Y. More formally, a wye consists of three paths of equal length with one common endpoint, called the *hub*.

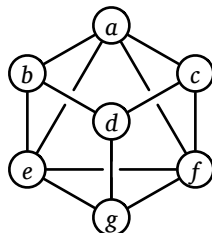


This grid graph contains a wye whose paths have length 4.

Prove that the following problem is NP-hard: Given an undirected graph G , what is the largest wye that is a subgraph of G ? The three paths of the wye must not share any vertices except the hub, and they must have exactly the same length.

Solved Problem

3. A *double-Hamiltonian tour* in an undirected graph G is a closed walk that visits every vertex in G exactly twice. Prove that it is NP-hard to decide whether a given graph G has a double-Hamiltonian tour.



This graph contains the double-Hamiltonian tour $a \rightarrow b \rightarrow d \rightarrow g \rightarrow e \rightarrow b \rightarrow d \rightarrow c \rightarrow f \rightarrow a \rightarrow c \rightarrow f \rightarrow g \rightarrow e \rightarrow a$.

Solution: We prove the problem is NP-hard with a reduction from the standard Hamiltonian cycle problem. Let G be an arbitrary undirected graph. We construct a new graph H by attaching a small gadget to every vertex of G . Specifically, for each vertex v , we add two vertices v^\sharp and v^\flat , along with three edges vv^\flat , vv^\sharp , and $v^\flat v^\sharp$.



A vertex in G , and the corresponding vertex gadget in H .

I claim that G has a Hamiltonian cycle if and only if H has a double-Hamiltonian tour.

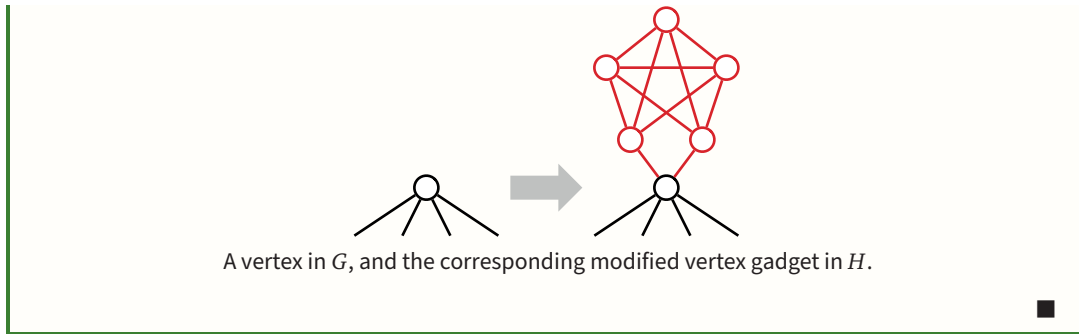
\implies Suppose G has a Hamiltonian cycle $v_1 \rightarrow v_2 \rightarrow \dots \rightarrow v_n \rightarrow v_1$. We can construct a double-Hamiltonian tour of H by replacing each vertex v_i with the following walk:

$$\dots \rightarrow v_i \rightarrow v_i^\flat \rightarrow v_i^\sharp \rightarrow v_i^\flat \rightarrow v_i^\sharp \rightarrow v_i \rightarrow \dots$$

\impliedby Conversely, suppose H has a double-Hamiltonian tour D . Consider any vertex v in the original graph G ; the tour D must visit v exactly twice. Those two visits split D into two closed walks, each of which visits v exactly once. Any walk from v^\flat or v^\sharp to any other vertex in H must pass through v . Thus, one of the two closed walks visits only the vertices v , v^\flat , and v^\sharp . Thus, if we simply remove the vertices in $H \setminus G$ from D , we obtain a closed walk in G that visits every vertex in G once.

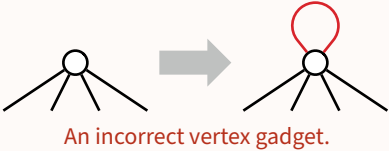
Given any graph G , we can clearly construct the corresponding graph H in polynomial time.

With more effort, we can construct a graph H that contains a double-Hamiltonian tour *that traverses each edge of H at most once* if and only if G contains a Hamiltonian cycle. For each vertex v in G we attach a more complex gadget containing five vertices and eleven edges, as shown on the next page.



Rubric: 10 points, standard polynomial-time reduction rubric. This is not the only correct solution.

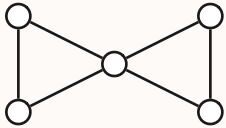
Non-solution (self-loops): We attempt to prove the problem is NP-hard with a reduction from the Hamiltonian cycle problem. Let G be an arbitrary undirected graph. We construct a new graph H by attaching a self-loop every vertex of G . Given any graph G , we can clearly construct the corresponding graph H in polynomial time.



Suppose G has a Hamiltonian cycle $v_1 \rightarrow v_2 \rightarrow \dots \rightarrow v_n \rightarrow v_1$. We can construct a double-Hamiltonian tour of H by alternating between edges of the Hamiltonian cycle and self-loops:

$$v_1 \rightarrow v_1 \rightarrow v_2 \rightarrow v_2 \rightarrow v_3 \rightarrow \dots \rightarrow v_n \rightarrow v_n \rightarrow v_1.$$

Unfortunately, if H has a double-Hamiltonian tour, we *cannot* conclude that G has a Hamiltonian cycle, because we cannot guarantee that a double-Hamiltonian tour in H uses *any* self-loops. The graph G shown below is a counterexample; it has a double-Hamiltonian tour (even before adding self-loops!) but no Hamiltonian cycle.



This graph has a double-Hamiltonian tour.



Some useful NP-hard problems. You are welcome to use any of these in your own NP-hardness proofs, except of course for the specific problem you are trying to prove NP-hard.

CIRCUITSAT: Given a boolean circuit, are there any input values that make the circuit output TRUE?

3SAT: Given a boolean formula in conjunctive normal form, with exactly three distinct literals per clause, does the formula have a satisfying assignment?

MAXINDEPENDENTSET: Given an undirected graph G , what is the size of the largest subset of vertices in G that have no edges among them?

MAXCLIQUE: Given an undirected graph G , what is the size of the largest complete subgraph of G ?

MINVERTEXCOVER: Given an undirected graph G , what is the size of the smallest subset of vertices that touch every edge in G ?

MINSETCOVER: Given a collection of subsets S_1, S_2, \dots, S_m of a set S , what is the size of the smallest subcollection whose union is S ?

MINHITTINGSET: Given a collection of subsets S_1, S_2, \dots, S_m of a set S , what is the size of the smallest subset of S that intersects every subset S_i ?

3COLOR: Given an undirected graph G , can its vertices be colored with three colors, so that every edge touches vertices with two different colors?

HAMILTONIANPATH: Given graph G (either directed or undirected), is there a path in G that visits every vertex exactly once?

HAMILTONIANCYCLE: Given a graph G (either directed or undirected), is there a cycle in G that visits every vertex exactly once?

TRAVELINGSALESMAN: Given a graph G (either directed or undirected) with weighted edges, what is the minimum total weight of any Hamiltonian path/cycle in G ?

LONGESTPATH: Given a graph G (either directed or undirected, possibly with weighted edges), what is the length of the longest simple path in G ?

STEINERTREE: Given an undirected graph G with some of the vertices marked, what is the minimum number of edges in a subtree of G that contains every marked vertex?

SUBSETSUM: Given a set X of positive integers and an integer k , does X have a subset whose elements sum to k ?

PARTITION: Given a set X of positive integers, can X be partitioned into two subsets with the same sum?

3PARTITION: Given a set X of $3n$ positive integers, can X be partitioned into n three-element subsets, all with the same sum?

INTEGERLINEARPROGRAMMING: Given a matrix $A \in \mathbb{Z}^{n \times d}$ and two vectors $b \in \mathbb{Z}^n$ and $c \in \mathbb{Z}^d$, compute $\max\{c \cdot x \mid Ax \leq b, x \geq 0, x \in \mathbb{Z}^d\}$.

FEASIBLEILP: Given a matrix $A \in \mathbb{Z}^{n \times d}$ and a vector $b \in \mathbb{Z}^n$, determine whether the set of feasible integer points $\max\{x \in \mathbb{Z}^d \mid Ax \leq b, x \geq 0\}$ is empty.

DRAUGHTS: Given an $n \times n$ international draughts configuration, what is the largest number of pieces that can (and therefore must) be captured in a single move?

SUPERMARIOBROTHERS: Given an $n \times n$ Super Mario Brothers level, can Mario reach the castle?