

Section (Check One) MWF 10am \_\_\_\_\_ TR 12:30pm \_\_\_\_\_

1. \_\_\_\_\_ / 25    2. \_\_\_\_\_ / 25

3. \_\_\_\_\_ / 25    4. \_\_\_\_\_ / 25    Total \_\_\_\_\_ / 100

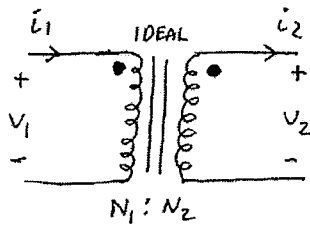
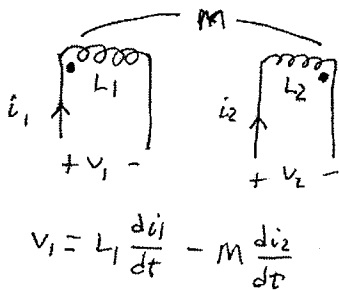
Useful information

$\sin(x) = \cos(x - 90^\circ)$        $\bar{V} = \bar{Z}\bar{I}$        $\bar{S} = \bar{V}\bar{I}^*$        $\bar{S}_{3\phi} = \sqrt{3}V_L I_L \angle \theta$

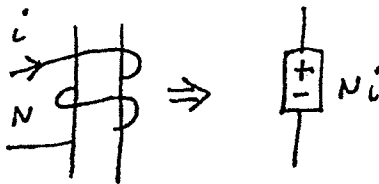
$0 < \theta < 180^\circ$  (lag)       $I_L = \sqrt{3}I_\phi$  (delta)       $\bar{Z}_Y = \bar{Z}_\Delta / 3$        $\mu_0 = 4\pi \cdot 10^{-7}$  H/m  
 $-180^\circ < \theta < 0$  (lead)       $V_L = \sqrt{3}V_\phi$  (wye)

$\int_C \mathbf{H} \cdot d\mathbf{l} = \int_S \mathbf{J} \cdot \mathbf{n} da$        $\int_C \mathbf{E} \cdot d\mathbf{l} = -\frac{\partial}{\partial t} \int_S \mathbf{B} \cdot \mathbf{n} da$        $\mathfrak{R} = \frac{l}{\mu A}$        $MMF = Ni = \phi \mathfrak{R}$

$\phi = BA$        $\lambda = N\phi$        $k = \frac{M}{\sqrt{L_1 L_2}}$       1 hp = 746 Watts



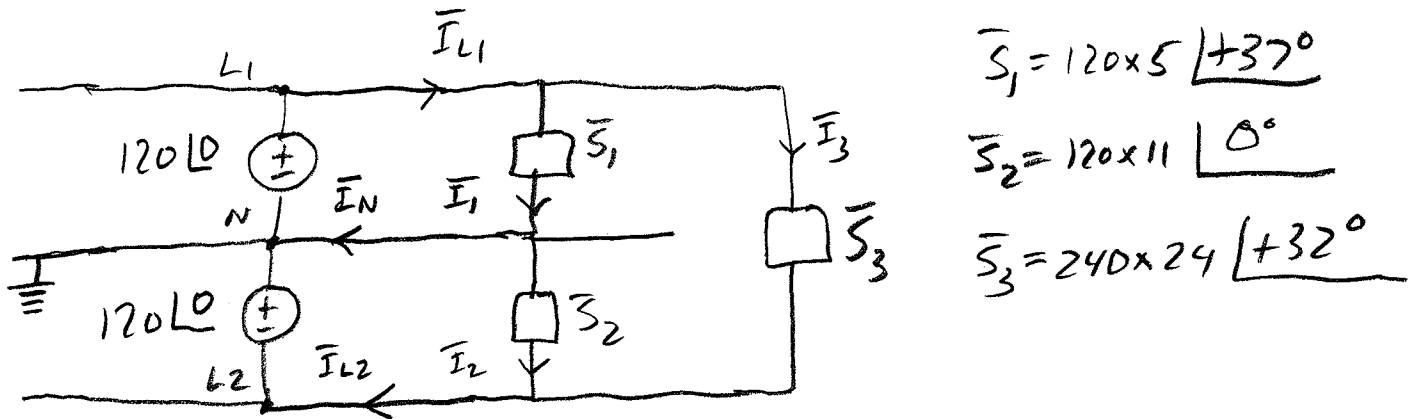
$a = \frac{N_1}{N_2}$        $N_1 i_1 = N_2 i_2$   
 $\frac{v_1}{v_2} = \frac{N_1}{N_2}$



**Problem 1. (25 points)**

The electrical service to your house is called 120/240 Volts, single phase, 3 wire. It consists of 3 wires named  $L_1$ ,  $L_2$ , and  $N$  coming into your house from the transformer in the back. The voltage drop from  $L_1$  to  $N$  is 120 volts angle zero. The voltage drop from  $L_2$  to  $N$  is 120 volts angle 180 degrees. The neutral wire ( $N$ ) is at ground potential. Suppose you hook up loads to these circuits as follows:

- A fan between  $L_1$  and  $N$  that draws 5 Amps at a power factor of 0.8 lag.
  - A toaster between  $L_2$  and  $N$  that draws 11 Amps at unity power factor.
  - An air conditioner between  $L_1$  and  $L_2$  that draws 24 Amps at a power factor of 0.85 lag.
- a) What is the total real power consumed by your house when the things above are turned on?  
 b) How much current is in each of the three wires (magnitude only) when all the things above are turned on?



$$a) \bar{S}_{TOT} = 479 + j361 + 1320 + j0 + 4885 + j3052$$

$$= \boxed{6684} + j3413 = 7505 \angle 27^\circ$$

$$b) \bar{I}_1 = 5 \angle -37^\circ \quad \bar{I}_2 = 11 \angle 0^\circ \quad \bar{I}_3 = 24 \angle -32^\circ$$

$$\bar{I}_{L1} = \bar{I}_1 + \bar{I}_3 = 4 - j3 + 20.4 - j12.7 = 24.4 - j15.7 = 29 \angle -32.8^\circ$$

$$\bar{I}_{L2} = \bar{I}_2 + \bar{I}_3 = 11 + j0 + 20.4 - j12.7 = 31.4 - j12.7 = 33.87 \angle -22^\circ$$

$$\bar{I}_N = \bar{I}_1 - \bar{I}_2 = 4 - j3 - 11 + j0 = -7 - j3 = 7.6 \angle 23.2^\circ + 180^\circ$$

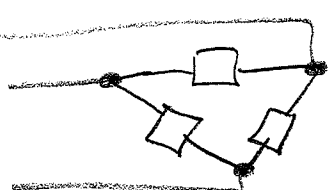
$$= 7.6 \angle +203.2^\circ$$

**Problem 2. (25 pts)**

A 345 KV(line-to-line) three-phase line supplies 750 MVA (3-phase) at 0.8 PF lagging to a three-phase load which is delta connected.

- Find the complex impedance per phase of the load
- Find the magnitudes of the line and phase currents
- Find the MVAR (3-phase) rating of a capacitor bank needed to improve the power factor to be 0.95 lagging.
- What will the line current be after the capacitors are installed.

a) 
$$\bar{S}_{1\phi} = \frac{750 \times 10^6}{3} \angle +\cos^{-1} 0.8 = (345 \times 10^3 \angle \theta) \left( \frac{345 \times 10^3 \angle \theta}{\bar{Z}_{\Delta}} \right)^*$$



$$= \frac{(345 \times 10^3)^2}{\bar{Z}_{\Delta}^*} \quad \bar{Z}_{\Delta} = \frac{(345 \times 10^3)^2}{250 \times 10^6 \angle -37^{\circ}}$$

$$\bar{Z}_{\Delta} = 476 \angle 37^{\circ} \Omega$$

b) 
$$750 \times 10^6 = \sqrt{3} \times 345 \times 10^3 \times I_L \quad I_L = 1255 \text{ A}$$

$$I_{\phi} = \frac{1255}{\sqrt{3}} = 725 \text{ A}$$

c) 
$$\bar{S}_{new} = \frac{600 \times 10^6}{0.95} \angle +\cos^{-1} 0.95 = 600 \times 10^6 + j 197 \times 10^6$$

$$\bar{S}_{old} = 750 \times 10^6 \angle +\cos^{-1} 0.8 = 600 \times 10^6 + j 450 \times 10^6$$

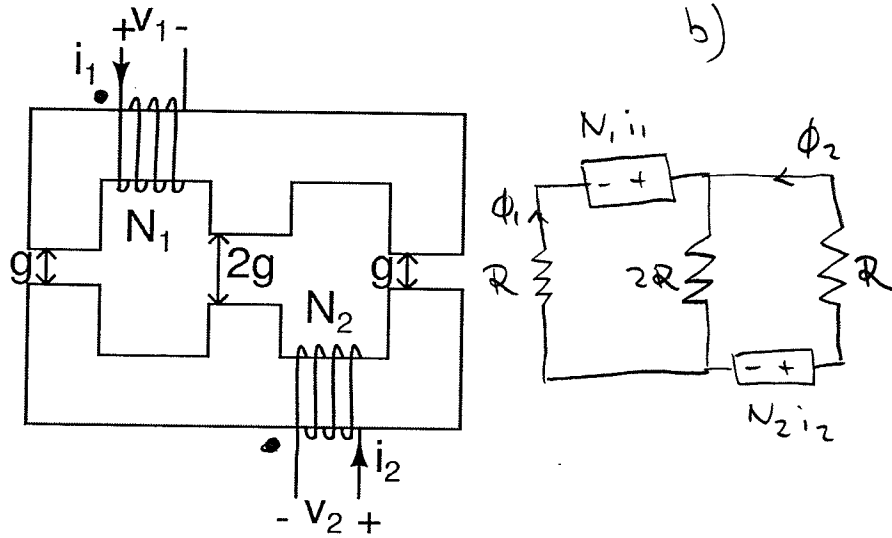
$$Q_{all} = 450 \times 10^6 - 197 \times 10^6 = 253 \times 10^6$$

of capacitive VARs

d) 
$$I_{L, new} = \frac{600 \times 10^6}{0.95 \times \sqrt{3} \times 345,000} = 1057 \text{ A}$$

**Problem 3. (25 points)**

A magnetic core with infinite permeability ( $\mu=\infty$ ) is shown below.



$$R = \frac{g}{\mu_0 A}$$

$$k = \frac{M}{\sqrt{L_1 L_2}}$$

For this problem, you can ignore any resistance in the coil, and any fringing effects in the gaps.

The cross sectional area of the core is  $1 \text{ cm}^2$ ,  $N_1 = 10$ ,  $N_2 = 40$ ,  $g = 1 \text{ mm}$ .

a) Identify the dot markings of the two windings.

b) Draw the magnetic equivalent circuit.

c) Find the magnitudes of the self-inductances, the mutual inductance, and the coupling coefficient  $k$ . Note, this part of the problem requires quite a bit of math. If you are short on time, you may want to consider doing the next problem and coming back to this part if time permits.

$$\text{c) } \textcircled{A} \quad N_1 i_1 = \Phi_1 R + 2R(\Phi_1 + \Phi_2)$$

$$\textcircled{B} \quad N_2 i_2 = \Phi_2 R + 2R(\Phi_1 + \Phi_2)$$

$$\textcircled{A} - \textcircled{B} \Rightarrow N_1 i_1 - N_2 i_2 = (\Phi_1 - \Phi_2) R$$

$$\Phi_1 = \frac{N_1 i_1 - N_2 i_2}{R} + \Phi_2 \leftarrow \text{plug into } \textcircled{B}$$

$$\Rightarrow N_2 i_2 = \Phi_2 R + 2R \left( \frac{N_1 i_1 - N_2 i_2}{R} + \Phi_2 \right) + 2R \Phi_2$$

$$N_2 i_2 = \Phi_2 R + 2N_1 i_1 - 2N_2 i_2 + 4R \Phi_2$$

$$\Phi_2 = \frac{3}{5} \frac{N_2 i_2}{R} - \frac{2}{5} \frac{N_1 i_1}{R}$$

$$L_1 = 7.53 \mu\text{H}$$

$$L_2 = 120 \mu\text{H}$$

$$\Phi_1 = \frac{N_1 i_1}{R} - \frac{N_2 i_2}{R} + \frac{3}{5} \frac{N_2 i_2}{R} - \frac{2}{5} \frac{N_1 i_1}{R}$$

$$\Phi_1 = \frac{3}{5} \frac{N_1 i_1}{R} - \frac{2}{5} \frac{N_2 i_2}{R}$$

$$\lambda_1 = N_1 \Phi_1 = \underbrace{\frac{3}{5} \frac{N_1^2}{R}}_{L_1} i_1 - \underbrace{\frac{2}{5} \frac{N_1 N_2}{R}}_M i_2$$

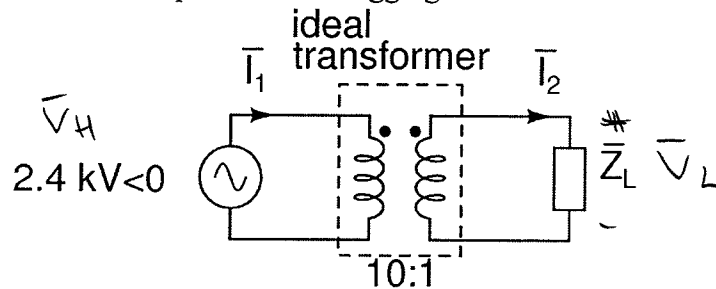
$$\lambda_2 = N_2 \Phi_2$$

$$\lambda_2 = -\frac{2}{5} \frac{N_2 N_1}{R} i_1 + \underbrace{\frac{3}{5} \frac{N_2^2}{R}}_{L_2} i_2$$

$$M = 20.1 \mu\text{H} \quad k = 0.67$$

**Problem 4. (25 points)**

a) An ideal single-phase 60 Hz transformer as shown below is used to supply power to a complex load drawing 1 KW at 0.8 power factor lagging.



1) Find the load impedance as seen from the high voltage side.

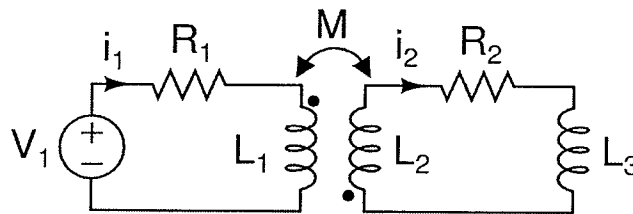
$$\vec{S} = \frac{1000}{0.8} \angle \arccos 0.8 = 1250 \angle 37^\circ \quad |V_H| = 2400$$

$$\vec{Z}_H = |V_H|^2 / \vec{S}^* = 4608 \angle 37^\circ \Omega$$

2) Find the magnitudes of currents  $I_1$  and  $I_2$ .

$$I_1 = \frac{|V_H|}{|Z_H|} = \frac{2400}{4608} = 0.52 \text{ A} \quad I_2 = \frac{N_1}{N_2} I_1 = 10 \cdot I_1 = 5.2 \text{ A}$$

b) The coupled coils  $L_1$  and  $L_2$  are connected in the circuit below (note that  $L_3$  is a regular inductor, and is not coupled).



1) Write the two loop equations. You do not need to solve them.

$$V_1 = i_1 R_1 + L_1 \frac{di_1}{dt} + M \frac{di_2}{dt}$$

$$0 = i_2 R_2 + L_3 \frac{di_2}{dt} + L_2 \frac{di_2}{dt} + M \frac{di_1}{dt}$$