

Section (Check one) MWF 10am _____ MWF 2pm _____

1. _____/25 2. _____/25
 3. _____/25 4. _____/25 TOTAL _____/100

USEFUL INFORMATION

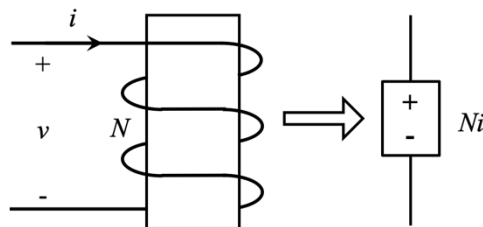
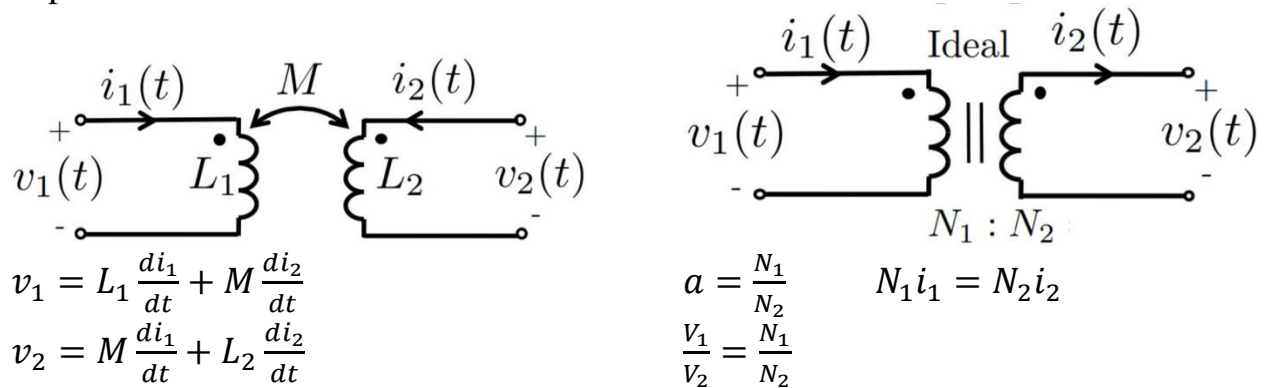
$\sin(x) = \cos(x - 90^\circ)$ $\bar{V} = \bar{Z}\bar{I}$ $\bar{S} = \bar{V}\bar{I}^* = P + jQ$ $\bar{S}_{3\phi} = \sqrt{3}V_L I_L \angle \theta$
 $0 < \theta < 180^\circ$ (lag) $I_L = \sqrt{3}I_\phi$ (delta) $\bar{Z}_Y = \bar{Z}_\Delta / 3$
 $-180^\circ < \theta < 0$ (lead) $V_L = \sqrt{3}V_\phi$ (wye) $\mu_0 = 4\pi \times 10^{-7} \text{H/m}$

ABC phase sequence has A at 0°, B at -120°, and C at +120°

$\int \underline{H} \cdot \underline{dl} = \int \underline{J}_f \cdot \hat{n} dA$ $\int \underline{E} \cdot \underline{dl} = -\frac{d}{dt} \left(\int \underline{B} \cdot \hat{n} dA \right)$ $\mathcal{R} = \frac{l}{\mu A}$ $Ni = \mathcal{R}\phi$

$\phi = BA$ $\lambda = N\phi = Li$ (if linear) $v = \frac{d\lambda}{dt}$ $k = \frac{M}{\sqrt{L_1 L_2}}$

1hp = 746 W



Problem 1 (25 Points)

A single phase source is serving three loads connected in parallel, through a feeder with impedance $\bar{Z}_{\text{feeder}} = 1 + j2 \Omega$.

- Load 1 is an impedance of $30 + j40 \Omega$.
- Load 2 draws 200 W at a lagging PF of 0.8.
- Load 3 draws 1 A at a leading PF of 0.6.

The voltage across the loads is $\bar{V}_{\text{load}} = 100 \angle 0^\circ \text{ V}$.

a) Compute the current phasors \bar{I}_1 , \bar{I}_2 , and \bar{I}_3 for each of the three loads (20 points total).

$$\bar{V}_L = 100 \angle 0^\circ \text{ V}$$

$$\bar{I}_1 = \frac{\bar{V}_L}{\bar{Z}_1}$$

$$\bar{Z}_1 = 30 + j40 \Omega = 50 \angle 53.13^\circ \Omega$$

$$\bar{I}_1 = \frac{100 \angle 0^\circ}{50 \angle 53.13^\circ} \Rightarrow \boxed{\bar{I}_1 = 2 \angle -53.13^\circ \text{ A}}$$

$$\begin{aligned} I_3 &= 1 \text{ A} \\ \theta_{i_3} &= +\cos^{-1}(0.6) \\ \theta_{i_3} &= 53.13^\circ \end{aligned}$$

$$\boxed{\bar{I}_3 = 1 \angle 53.13^\circ \text{ A}}$$

$$P_2 = V I_2 (\text{PF}_2)$$

$$I_2 = \frac{P_2}{V(\text{PF}_2)} \Rightarrow I_2 = \frac{200}{100(0.8)} \Rightarrow I_2 = 2.5 \text{ A}$$

$$\theta_{i_2} = -\cos^{-1}(0.8) = -36.87^\circ$$

$$\boxed{\bar{I}_2 = 2.5 \angle -36.87^\circ \text{ A}}$$

c) What is the source voltage \bar{V}_{source} ? (3 points)

$$\begin{aligned}\bar{I}_{\text{tot}} &= \bar{I}_1 + \bar{I}_2 + \bar{I}_3 \\ &= (1.2 - j1.6) + (2 - j1.5) + (0.6 + j0.8) \\ &= 3.8 - j2.3 \text{ A} \\ &= 4.44 \angle -31.18^\circ \text{ A}\end{aligned}$$

$$\begin{aligned}\bar{V}_s &= \bar{V}_{\text{load}} + \bar{Z}_{\text{line}} \bar{I}_{\text{tot}} \\ &= 100 \angle 0^\circ + (2.24 \angle 63.43^\circ)(4.44 \angle -31.18^\circ) \\ &= 100 \angle 0^\circ + 9.9456 \angle 32.25^\circ\end{aligned}$$

$$\begin{aligned}\bar{V}_s &= 108.41 + j5.307 \text{ V} \\ &= 108.54 \angle 2.80^\circ \text{ V}\end{aligned}$$

d) What is the power factor at the source? State whether it is leading or lagging. (1 point)

$$\theta_s = (280 - [-31.18]) = 33.98$$

$$\text{PF} = 0.829 \text{ lagging}$$

e) What is the power factor at the load? State whether it is leading or lagging. (1 point)

$$\theta = 31.18^\circ$$

$$\text{PF} = 0.856 \text{ lagging}$$

Problem 2 (25 Points)

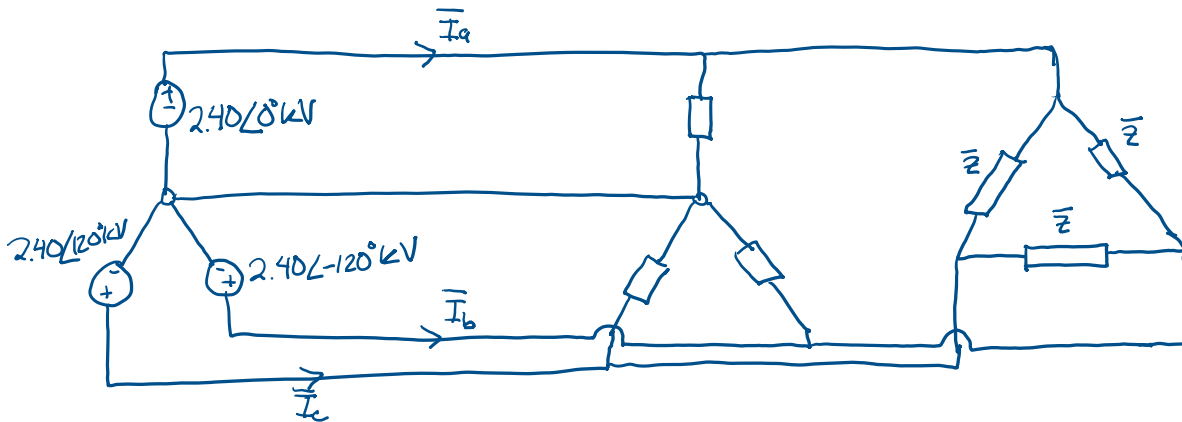
A Wye-connected three-phase generator delivers 1200 kVA at 0.6 PF lagging and 4160 volt (line-to-line) to the following loads in parallel.

- Load 1 is connected in Wye, and draws a total of 300 kW at unity power factor.
- Load 2 is an impedance load connected in Delta, with unknown per-phase impedance \bar{Z} .

a) Draw the three-phase circuit diagram. Label all relevant instances of the following:

- Phase-to-neutral voltage phasor (e.g. $10\angle 50^\circ$ V).
- Per-phase impedance for load 2 as symbolic expressions (e.g. $\bar{Z}/\sqrt{3}$ Ω).

Include polarity markers (+/-) in all of your voltage labels. (11 points)



b) Draw the single-phase equivalent circuit for phase a. Label one instance of the following:

- Voltage phasor (e.g. $10\angle 50^\circ$ V).
- Power for the generator in terms of kVA and PF (e.g. 10 kVA at 0.1 PF leading).
- Power for load 1 in terms of kVA and PF (e.g. 10 kVA at 0.1 PF leading).
- Impedance for load 2 as a symbolic expression (e.g. $\bar{Z}/\sqrt{3}$ Ω).

All quantities should be stated in per-phase values. (6 points)



$$S_{1,\phi} = 100 \text{ kVA}, \text{ PF} = 1$$

$$S_{\text{gen},1\phi} = 400 \text{ kVA}, \text{ PF} = 0.6 \text{ lagging}$$

d) How much three-phase kVARs do we need to bring the combined power factor to unity? How would you connect the capacitors (in Wye or Delta) and why? (3 points)

$$\begin{aligned}\bar{S}_{3\phi} &= 1200 \angle 53.13^\circ \text{ kVA} \\ &= 720 + j960 \text{ kVA}\end{aligned}$$

Add 960 kVAR of capacitance

Delta: lower capacitance needed to get given power, lower phase current

Wye: lower phase voltage

Either: complex power equation is the same for Wye and Delta

e) Compute the numerical value for the unknown impedance \bar{Z} . (5 points)

$$\bar{S}_2 = \bar{S}_{\text{tot}} - \bar{S}_1$$

$$= 420 + j960 \text{ kVA}$$

$$= 1047.85 \angle 66.37^\circ$$

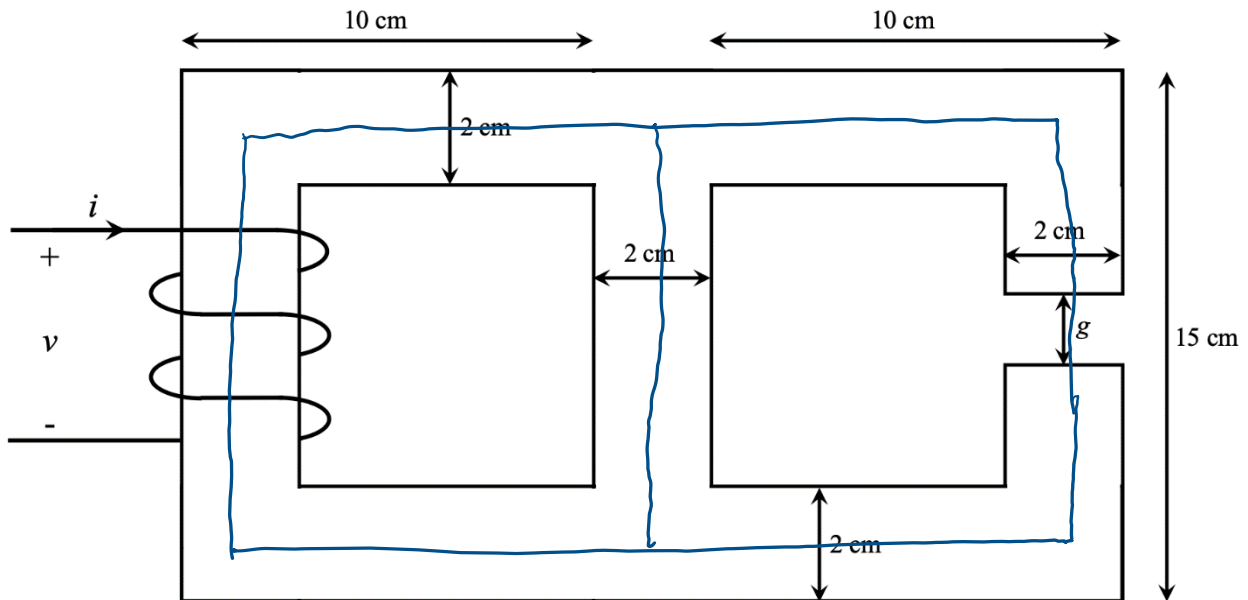
$$\bar{S}_2 = 3\bar{V}_L \bar{I}_\phi^* \Rightarrow \bar{S}_2 = \frac{3V_L^2}{\bar{Z}^*} \Rightarrow$$

$$\bar{I}_\phi = \frac{V_L}{\bar{Z}}$$

$$\bar{Z} = \left(\frac{3V_L^2}{\bar{S}_2} \right)^*$$

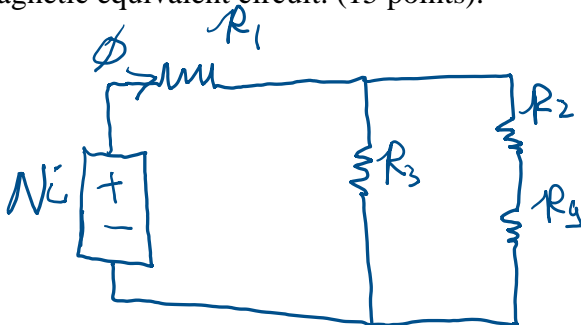
$$\bar{Z} = 49.54 \angle 66.37^\circ \Omega$$

Problem 3 (25 Points)



A coil is wrapped 300 times around an iron core with the given dimensions and a depth of 2 cm into the page. The iron has a permeability $\mu=2000\mu_0$ and contains an air gap of $g=2$ mm. Fringing effects can be neglected.

a) Draw the magnetic path through the iron core on the figure above and draw the corresponding magnetic equivalent circuit. (15 points).



$$R_1 = \frac{33\text{cm}}{2000\mu_0(4\text{cm}^2)} \Rightarrow R_1 = 3.283 \times 10^5 \text{ At/Wb}$$

$$R_2 = \frac{33\text{cm} - 2\text{mm}}{2000\mu_0(4\text{cm}^2)} \Rightarrow R_2 = 3.263 \times 10^5 \text{ At/Wb}$$

$$R_3 = \frac{13\text{cm}}{2000\mu_0(4\text{cm}^2)} \Rightarrow R_3 = 1.293 \times 10^5 \text{ At/Wb}$$

$$R_4 = \frac{2\text{mm}}{\mu_0(4\text{cm}^2)} \Rightarrow R_4 = 3.979 \times 10^6 \text{ At/Wb}$$

b) What is the total flux ϕ through the circuit? (7 points)

$$Ni = \phi R_{\text{tot}}$$
$$R_{\text{tot}} = \left(\frac{1}{R_3} + \frac{1}{R_2 + R_3} \right)^{-1} + R_1$$
$$= 4.538 \times 10^5 \text{ At/Wb}$$

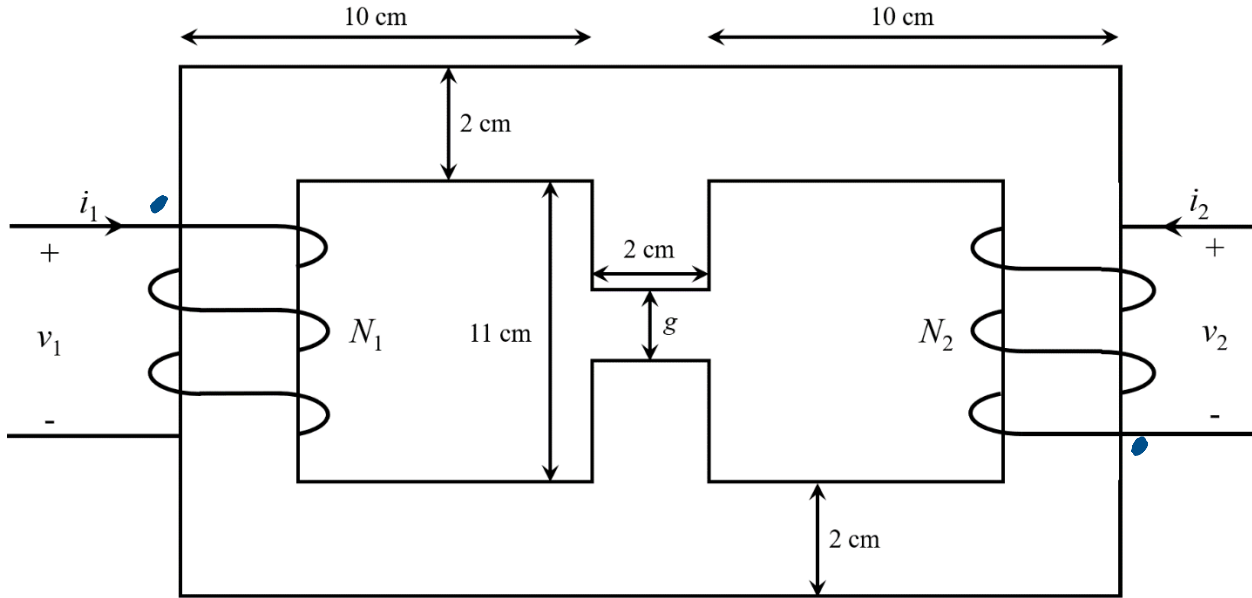
$$300i = 4.538 \times 10^5 \phi$$
$$\phi = 6.610 \times 10^{-4} i$$

c) What is the inductance of the coil? (3 points)

$$\lambda = N\phi = Li$$
$$\lambda = 300(6.610 \times 10^{-4})i$$
$$\lambda = 0.198 i$$

$$L = 0.198 \text{ H}$$

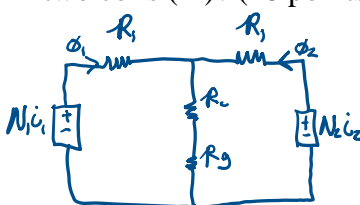
Problem 4 (25 Points)



Two coils are wrapped around an iron core with the given dimensions and depth of 3 cm into the page. Coil 1 contains 400 turns and Coil 2 contains 200 turns. The iron has a permeability $\mu=1500\mu_0$ and contains an air gap of $g=4$ mm. Fringing effects can be neglected.

a) Draw on the figure above where the dot marks should go for each coil. (2 points)

b) What is the self-inductance for each coil (L_1 and L_2) and the mutual inductance between the two coils (M)? (18 points)



$$R_1 = \frac{33 \text{ cm}}{1500\mu_0 (6 \text{ cm}^2)} \Rightarrow R_1 = 2.918 \times 10^5 \text{ At/Wb}$$

$$R_2 = \frac{13 \text{ cm} - 4 \text{ mm}}{1500\mu_0 (6 \text{ cm}^2)} \Rightarrow R_2 = 1.114 \times 10^5 \text{ At/Wb}$$

$$R_3 = \frac{4 \text{ mm}}{\mu_0 (6 \text{ cm}^2)} = R_3 = 5.305 \times 10^6 \text{ At/Wb}$$

$$N_1 i_1 = R_1 \phi_1 + (R_2 + R_3) (\phi_1 + \phi_2)$$

$$-N_2 i_2 = R_1 \phi_2 + (R_2 + R_3) (\phi_1 + \phi_2)$$

$$N_1 i_1 - N_2 i_2 = R_1 (\phi_1 - \phi_2)$$

$$\phi_1 = \frac{N_1 i_1 - N_2 i_2}{R_1} + \phi_2$$

$$\phi_1 = 7.034 \times 10^{-4} i_1 - 1.669 \times 10^{-4} i_2$$

$$\lambda_1 = N_1 \phi_1$$

$$\lambda_1 = 0.2814 i_1 - 0.06676 i_2$$

$$L_1 = 0.2814 \text{ H}$$

$$L_2 = 0.01758 \text{ H}$$

$$M = 0.0667 \text{ H}$$

$$N_2 i_2 = (R_1 + R_2 + R_3) \phi_2 + (R_2 + R_3) \phi_1$$

$$N_2 i_2 = (R_1 + R_2 + R_3) \phi_2 + (R_2 + R_3) \left[\frac{N_1 i_1 - N_2 i_2}{R_1} + \phi_2 \right]$$

$$= (R_1 + 2R_2 + 2R_3) \phi_2 + \left(\frac{R_2 + R_3}{R_1} \right) [N_1 i_1 - N_2 i_2]$$

$$-\left(\frac{R_2 + R_3}{R_1} \right) N_1 i_1 + \left(1 + \frac{R_2 + R_3}{R_1} \right) N_2 i_2 = (R_1 + 2R_2 + 2R_3) \phi_2$$

$$\phi_2 = 6.674 \times 10^{-4} i_1 + 1.758 \times 10^{-4} i_2$$

$$\lambda_2 = N_2 \phi_2$$

$$\lambda_2 = -0.06674 i_1 + 0.01758 i_2$$

c) What is the open circuit voltage measured across Coil 2 if a current of $i_1 = \sqrt{2}(10)\cos(377t)$ is applied across Coil 1? Write your answer as a cosine function. (5 points)

$$V_1 = L_1 \frac{di_1}{dt} - M \frac{di_2}{dt}$$

$$V_2 = -M \frac{di_1}{dt} + L_2 \frac{di_2}{dt}$$

Open circuit: $i_2 = 0$

$$V_2 = -M \frac{di_1}{dt}$$

$$V_2 = -0.06676 \left(-\sqrt{2}(10)(377) \sin(377t) \right)$$

$$V_2 = \sqrt{2}(251.69) \sin(377t)$$

$$V_2 = \sqrt{2}(251.69) \cos(377t - 90^\circ)$$

(Blank page for extra work)